



Telling time – o'clock and half past

The minute hand is on 12 and the hour hand is on 4.



4 o'clock




half past 4

The minute hand is on 6 and the hour hand is half way between 4 and 5.

- 1 Complete these labels of the clock hands by writing these words in the correct places – *long, short, hours, past, to* and *o'clock*:

The hour hand is _____.

It shows the _____.

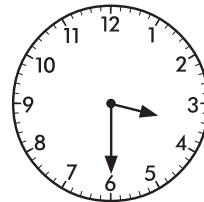

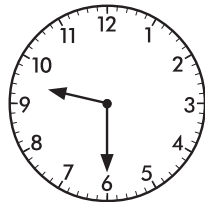
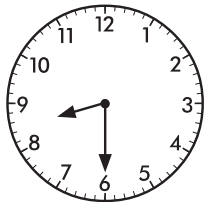


The minute hand is _____.

It shows how many minutes _____ or _____.

It can also show _____.

- 2 Draw a line to connect each of these clocks to the matching times:



half past 3

7 o'clock

half past 8

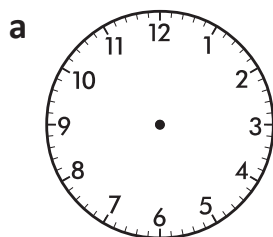
half past 9

Remember when it is half past, the hour hand points between the hours.

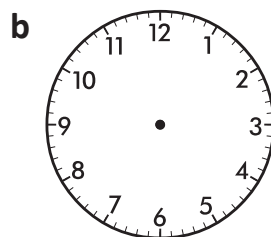


REMEMBER

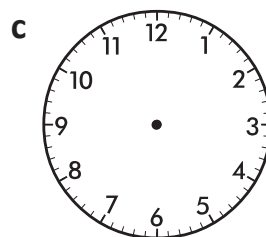
- 3 Draw the hour and minute hands on each clock to show the correct time:



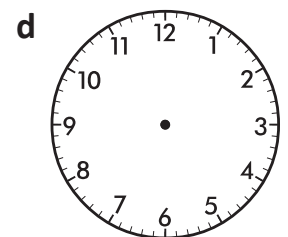
half past 10



5 o'clock




1 o'clock



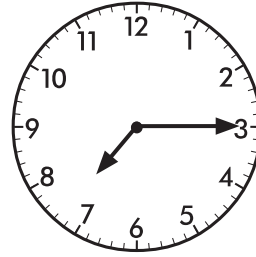
half past 2

Telling time – quarter to and quarter past

When the minute hand is on 9, it is 15 minutes to the hour or it has a quarter of the way to go before it reaches the hour.



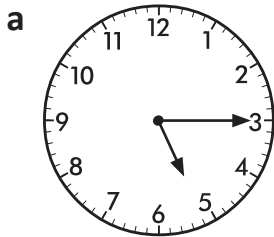
A quarter to 8



A quarter past 7

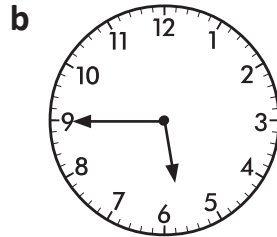
When the minute hand is on 3, it is 15 minutes past the hour or it has gone a quarter of the way around the clock face.

1 Write either 'past' or 'to' in the blanks:



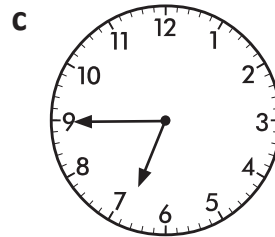
A quarter

_____ 5.



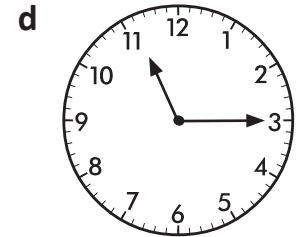
A quarter

_____ 6.



A quarter


_____ 7.



A quarter

_____ 11.

2 Draw a line to connect each clock to its time label. Each clock has more than one label.



15 minutes past 9

a quarter to 3

a quarter past 8

15 minutes past 4

15 minutes past 8


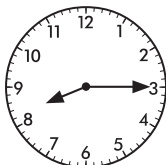

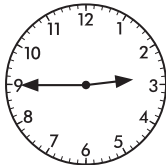
15 minutes to 11

a quarter past 4

15 minutes to 3

a quarter to 11

a quarter past 9



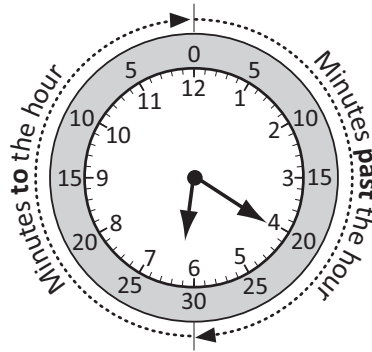
Remember that a quarter of an hour is 15 minutes. That is why we say a quarter past and a quarter to.



REMEMBER

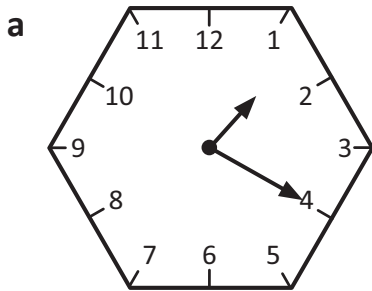
Telling time – five minute intervals past the hour

It takes 5 minutes for the minute hand to move from one number to the next. The time shown on this clock is 20 minutes past 6.

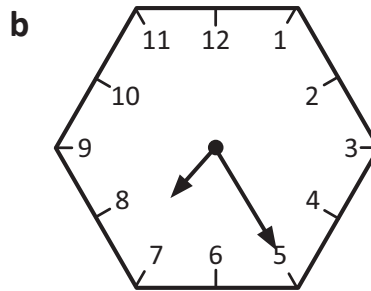


20 past 6

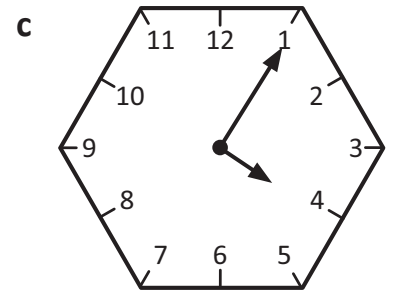
1 Complete these labels of the clock hands:



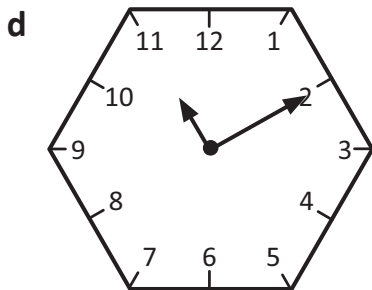
_____ past _____



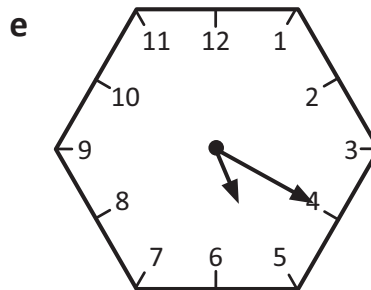
_____ past _____



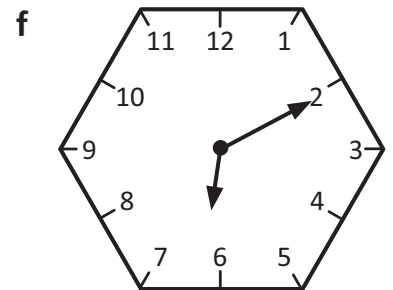
_____ past _____



_____ past _____




_____ past _____

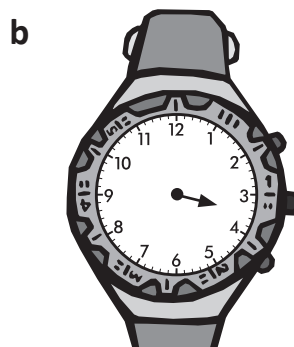


_____ past _____

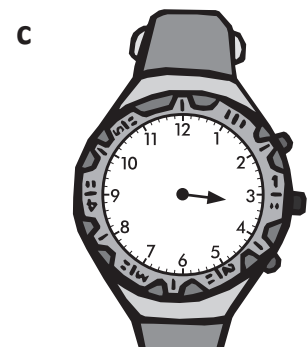
2 Draw the minute hand on each watch according to the label:



5 past 3



25 past 3

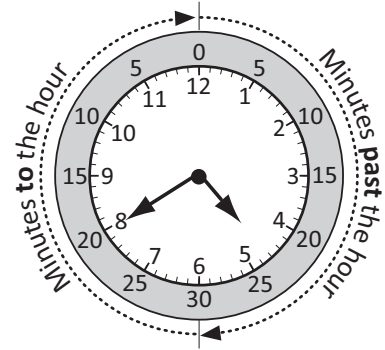


10 past 3

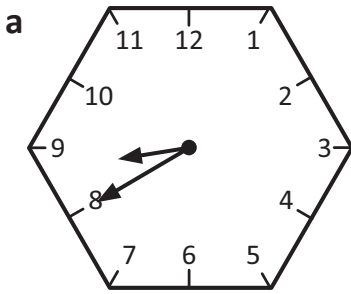
Telling time – five minute intervals to the hour

When the time is later than half past, instead of saying the number of minutes after the hour we usually say the number of minutes **before** or **to** the next hour.

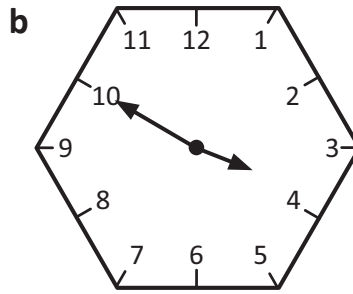
20 to 5



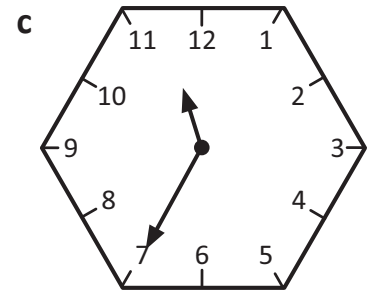
1 Complete these labels of the clock hands:



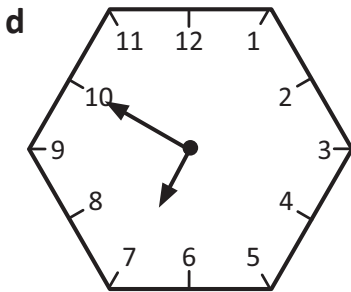
_____ to _____



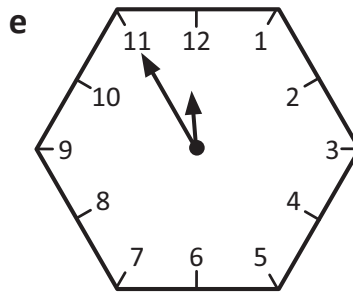
_____ to _____



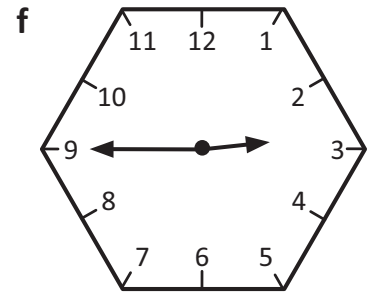
_____ to _____



_____ to _____



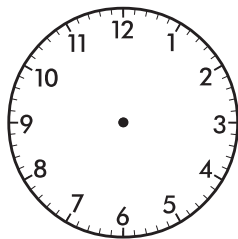
_____ to _____



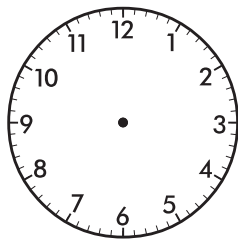
_____ to _____

2 Draw the hands on the clocks to show these times.

a 20 to 2



b 10 to 8



c 5 to 6

