












Morning English - Essential	Morning English - Additional	Break 30 Mins	Middle Maths - Essential	Middle Maths - Additional	Break 1 hour	Afternoon Science - Extension
<p>Writing - Persuasive Texts</p>  <p>Unjumbling the structure of a persuasive text.</p> <p>On Seesaw there is a persuasive text, however, it is out of order.</p> <p>In your writing books rewrite it in the correct order AND add a supporting example to each of the three supporting reasons.</p> 	<p>Reading and Comprehension</p> <p>Read the next 2 chapters of your chosen novel and, when you are finished, choose as many of the following activities as you would like to complete. Use your English book to complete the activities:</p> <ol style="list-style-type: none"> Write about how what you read relates to something in your life Identify and write what the problem is in your book so far and what you think the solution will be Draw and label (using adjectives) a picture of the characters in your book Choose 2 characters and compare them <p>Literacy Planet</p> <p>Complete one or more assigned grammar activities.</p>	<p>You might like to choose an activity from one of the "Break Ideas" sheets</p>	<p>Maths Mentals Book</p> <p>Complete one column. Time yourself and mark with a calculator.</p> <p>Time</p>  <ol style="list-style-type: none"> Watch the following YouTube clip about the history of timekeeping: www.youtube.com/watch?v=PXiyaWnixqo Answer the following pre-work questions: <ol style="list-style-type: none"> Convert 120 seconds to minutes Convert 72 hours to days Is 7:15 in the morning written in am or pm notation? Ten to nine in the morning is the same as? If you catch a 9.06am bus and arrive at your destination at 10.34am, how long did the journey take? Go to this website https://education.abc.net.au/res/i/L9649/index.html and correctly convert at least 10 times from: <ol style="list-style-type: none"> analogue to digital digital to analogue. <p>If you don't have access to a computer, draw 5 clocks and write the time in analogue time (eg: 5:30pm)</p> <ol style="list-style-type: none"> Complete Pages 1-2 of your <i>Time Booklet</i>. <p>Extension questions:</p> <ol style="list-style-type: none"> You arrive at the airport at 1:50 pm and your flight leaves at 5:20 pm. How many minutes will you need to wait? Sally decides to watch all the Season 1 episodes of her favourite TV show, one after the other! There are eight 30-minute episodes in the season. How many hours will her TV marathon take? There are 30 days in September, April, June and November. What are the total number of days in these 4 months? 	<p>Daily Number Challenge</p>  <p>Today's number is 8. The extension number is 23!</p> <ol style="list-style-type: none"> Round to the nearest 10 Double it What is half of it? 10 more Add 35 Subtract 18 Times by 10 Multiply by 2 <p>Daily Maths Problems Booklet</p> <p>Complete a page of your <i>Daily Maths Problems Booklet</i>, showing all working out. Get someone older than you to check your work.</p> <p>Mathletics</p> <p>Complete one or more assigned activities.</p>	<p>You might like to choose an activity from one of the "Break Ideas" sheets</p>	<p>Reflective light</p> <p>Q1. How do cars see at night-time?</p> <p>What is reflective light? Light travels in a straight line. When light hits an object, it is reflected (bounces off). If the reflected light hits our eyes, we can see the object. Some surfaces and materials reflect light well. Other materials do not reflect light well.</p> <p>Q2. Why do you think firefighters, builders and road workers wear clothes with reflective strips?</p> <p>Game: To play with a family member. Write a mirror message to your partner.</p> <ol style="list-style-type: none"> Write a short message. Then hold a mirror so you can see your message reflected in the mirror. Copy the message you see in the mirror onto another piece of paper, so that your writing is reversed. Swap messages with your partner and hold the mirror. Can you read their message in the mirror? Think about how the mirrors helped you read the messages.







Morning English - Essential	Morning English - Additional	Break 30 Mins	Middle Maths - Essential	Middle Maths - Additional	Break 1 hour	Afternoon History - Extension
<p>Writing - Persuasive Texts</p>  <p>What is the purpose of each part of a persuasive text?</p> <p>On the allocated Seesaw activity, you need to write (either using the drawing tool or the text box tool) what you think the purpose of each part of a persuasive text is.</p> <p>You need to write what you think should be included into each section.</p>	<p>Journal Writing</p> <p>In your 'My Book' write a journal entry. You can write about anything you want or use one or more of the following prompts:</p> <ul style="list-style-type: none"> - Who do I look up to the most and why? - If I could be anything when I grow up, I would be ... - Write about a time you felt really happy - Why? <p>Literacy Planet</p> <p>Complete one or more assigned grammar activities.</p>	<p>You might like to choose an activity from one of the "Break Ideas" sheets</p>	<p>Maths Mentals Book</p> <p>Complete one column. Time yourself and mark with a calculator.</p>  <p>Time</p> <ol style="list-style-type: none"> 1) Go to the same website from yesterday (https://education.abc.net.au/res/i/L9649/index.html) and correctly convert 10 times from: <ol style="list-style-type: none"> a) analogue to digital b) digital to analogue. <p>If you don't have access to a computer, draw 5 clocks and write the time in analogue time (eg: 5:30pm)</p> 2) Complete the two "Telling time to the minute" worksheets (Pages 14-15 of your <i>Time Booklet</i>). 3) Complete Pages 3-4 of your <i>Time Booklet</i>. <p>Extension questions:</p> <ol style="list-style-type: none"> 1) There are 4 quarters in a game of netball. Each quarter is 15 minutes long. How many hours are there in a season of 10 netball games? 2) Erica earns pocket money by teaching her grandfather to use a tablet. After 3 months, Erica has earned \$300. If she keeps helping her grandfather, how much will she earn in 1 year? 3) Nigel's mum is having trouble boiling the perfect egg. She knows that she should cook it for 3 minutes, but her timer is measured in seconds. How many seconds should Nigel's mum set her timer for? 	<p>Daily Number Challenge</p> <p>Today's number is 14. The extension number is 211!</p> <ol style="list-style-type: none"> 1. Triple the number 2. Multiply by 3 3. Take away the numbers in the unit column (eg: 145 becomes 140) 4. Halve it 5. Double it 6. Minus 16 7. Add 78 8. Round to the nearest 10 <p>Daily Maths Problems Booklet</p> <p>Complete a page of your <i>Daily Maths Problems Booklet</i>, showing all working out. Get someone older than you to check your work.</p> <p>Mathletics</p> <p>Complete one or more assigned activities.</p>	<p>You might like to choose an activity from one of the "Break Ideas" sheets</p>	<p>First Contacts</p> <p>Watch the following video https://www.abc.net.au/btn/classroom/endeavour-history/12176470</p>  <p>Answer these questions in your book:</p> <ol style="list-style-type: none"> 1. When did the Endeavour set sail from England? 2. Who led the voyage of discovery on the Endeavour? 3. Describe James Cook's background. 4. What did Cook study that would help him to become a ship's captain? 5. Fill in the missing words: By the 18th Century, _____ had been mapping the globe for centuries, claiming _____ and resources as their own. (Europeans and land) 6. Who was Joseph Banks? 7. Why did Banks want to travel on the Endeavour? 8. The main aim of the voyage was to travel to... 9. What rare event was the Endeavour crew aiming to observe? 10. What was their secret mission?



Morning English - Essential	Morning English - Additional	Break 30 Mins	Middle Maths - Essential	Middle Maths - Additional	Break 1 hour	Afternoon PDHPE - Extension
<p><u>Reading and Comprehension</u> Read the next 4 chapters of your novel. When you are finished writing, choose 3 of the following activities to complete in your English book.</p> <ol style="list-style-type: none"> Write a short summary of what you have read in your novel so far Make a list of at least 10 unknown/ unusual or tricky words and write what you think the definition is Write a description and draw the setting of your story Write an alternative beginning Create a new title page Write and explain what your favourite part of the story was so far 	<p><u>Handwriting</u> Complete the next 2 pages in your Handwriting textbook. When you are finished, write a poem about how you are feeling today. It could be an Acrostic, Haiku, cinquain or any other type of poem. Use your neatest handwriting and decorate it.</p> <p><u>Diary Writing</u> Write about how you are feeling today. Include what is going on in your life. This is just for you - NO ONE will see it.</p> <p><u>Reading</u> Find a quiet space in your house or garden. Choose a book - it can be anything you want - and read quietly by yourself for 30 minutes.</p>	<p>You might like to choose an activity from one of the "Break Ideas" sheets</p>	<p><u>Maths Mentals Book</u> Complete one column. Time yourself and mark with a calculator.</p> <p><u>Time</u></p>  <ol style="list-style-type: none"> Answer the following questions (once completed, mark by looking at the answers on page 8 of your <i>Time Booklet</i>): <ol style="list-style-type: none"> 60 seconds = __ minutes 60 minutes = __ hour __ hours = 1 day __ days = 1 week __ days = 1 fortnight __ weeks = a year __ months = 1 year __ days = 1 year __ days = 1 leap year Complete Pages 7-10 of your <i>Time Booklet</i>. <p><u>Extension questions:</u></p> <ol style="list-style-type: none"> Jin Young went to the market to buy 22 watermelons. At the register, the cashier had to lift and weigh each watermelon separately. This took 30 seconds per watermelon. How many minutes before the cashier had finished weighing all the melons? Once upon a time there were three little pigs. Each pig built a house. The straw house took 45 minutes to make, the stick house took an hour and the brick house took 75 minutes. How many hours in total did the pigs work on their houses? Jane picks apples all day. She earns \$10 per basket of apples. She can fill 3 baskets in an hour. If she works for 8 hours each day, how much money will she earn in two days? 	<p><u>Daily Number Challenge</u></p>  <p>Today's number is 33. The extension number is 555!</p> <ol style="list-style-type: none"> Add 111 Round to the nearest 100 Minus 44 Round to the nearest 10 Times by 11 Divide by 10 Add the starting number <p><u>Daily Maths Problems Booklet</u> Complete a page of your <i>Daily Maths Problems Booklet</i>, showing all working out. Get someone older than you to check your work.</p> <p><u>Mathletics</u> Complete one or more assigned activities.</p>	<p>You might like to choose an activity from one of the "Break Ideas" sheets</p>	<p><u>Personal Development - eSafety</u> The eSafety Commissioner (eSafety) is Australia's national independent regulator for online safety. Have a look through the kid sections below of the eSafety Commissioner website with an adult.</p> <p>Scroll through the "Be an eSafe kid" section: https://www.esafety.gov.au/kids/be-an-esafe-kid Have a look at the headings of the "I want help with" section and click on any links that you want more information on: https://www.esafety.gov.au/kids/i-want-help-with</p> <p><u>Physical Activity</u> You will have a session of physical education with Mr DJ at school this week.</p> <p>If you are not attending school this week, pick one of the previous Physical Activities we have set for you over the last few weeks or pick something from the Fitness Break Ideas sheet. You can find the previous week's work and the Break Ideas sheets on our school website: https://turrumurra-p.schools.nsw.gov.au/learning-from-home/year-3---4-stage-2-.html</p>



Morning English - Essential	Morning English - Additional	Break 30 Mins	Middle Maths - Essential	Middle Maths - Additional	Break 1 hour	Afternoon STEM - Extension
<p><u>Writing - Persuasive Texts</u></p>  <p>Choose one of the 3 following topics and write an engaging and hooking opening statement clearly stating your opinion on the topic. You can either agree or disagree with the topic.</p> <p>Next, you must write out three reasons to support your argument. These should be stated in one clear sentence (write them out one of a time).</p> <p>Finally, make sure each of your three reasons are supported by examples. Your examples are used to provide more information and to also persuade your reader more to agree with your opinion.</p> <p>Topics:</p> <ol style="list-style-type: none"> 1. Every child should have to join a sport team outside of school 2. Life skills such as gardening/cooking/washing/cleaning should be taught to all students from year 3 onwards 3. Every child over 10 should have a pet (dog, cat, fish etc) to learn care and responsibility 	<p><u>Spelling</u></p> <p>Complete the next unit of Sound-waves. Mark it with an adult, making sure you understand the spelling rules in the unit.</p> <p>Then:</p> <ol style="list-style-type: none"> 1. Make a find-a-word with all the spelling words 2. Make a crossword with all the spelling words <p><u>Literacy Planet</u></p> <p>Complete one or more assigned grammar activities.</p>	<p>You might like to choose an activity from one of the "Break Ideas" sheets</p>	<p><u>Maths Mentals Book</u></p> <p>Complete one column. Time yourself and mark with a calculator.</p>  <p><u>Time</u></p> <ol style="list-style-type: none"> 1) Copy the saying at the top of page 11 of your <i>Time Booklet</i> into your maths book. Read over it multiple times to learn it by heart. 2) Complete Pages 11-12 of your <i>Time Booklet</i>. 3) Look at a calendar you have at home and answer the following questions: <ol style="list-style-type: none"> a) what is the date 5 days from today? b) what day of the week will it be in 18 days? c) how many days until June 4th? d) what was the date 22 days ago? e) what day of the week was it 9 days ago? 4) Come up with your own questions with the following dates as the answers: a) July 14th b) Thursday c) May 18th d) April 27th e) Monday <p>Extension questions:</p> <ol style="list-style-type: none"> 1. An alien visits from a planet which uses different units of time called 'florbles'. If one florble is the same as 4 Earth hours, how many florbles are there in an Earth day? 2. In Ancient Egypt, farmers knew that there were four 3-month seasons in a farming year. Months were measured by the moon cycle, which was 28 days. How many days were in one Egyptian summer? 3. Amazing Man can fly so quickly that he can fly to the moon and back in one hour. Mars is 48 times further away than the moon. How many days would it take Amazing Man to make a return trip to Mars? 	<p><u>Daily Number Challenge</u></p>  <p>Today's number is 3. The extension number is 107!</p> <ol style="list-style-type: none"> 1. Add 65 2. Minus 22 3. Round to the nearest 10 4. Half 5. Triple 6. Plus 401 7. Minus two lots of the starting number <p><u>Daily Maths Problems</u></p> <p>Complete a page of your <i>Daily Maths Problems Booklet</i>, showing all working out. Get someone older to check your work.</p> <p><u>Mathletics</u></p> <p>Complete assigned activities.</p>	<p>You might like to choose an activity from one of the "Break Ideas" sheets</p>	<p><u>Falling from the Sky Challenge:</u> Design and construct a parachute that will prevent a hard-boiled egg (or similar object) from breaking when dropped from a predetermined height</p> <p><u>Suggested Materials:</u> Paper, plastic bag, cellophane, cling wrap, plastic or Styrofoam cup, tape, sponges, straws, bubble wrap, tissue paper, string.</p>  <p>Have fun and upload a video to Seesaw if you do it.</p> <p><u>Languages – Mandarin</u></p> <p>Work on an activity from the Year 3 and/or Year 4 section of the school website: https://turrumurra-p.schools.nsw.gov.au/learning-from-home/multiple-subject-areas/mandarin.html</p>



Morning Sport - Essential	Morning English - Additional	Break 30 Mins	Middle Maths - Essential	Middle Finish Off Time - Additional	Break 1 hour	Afternoon Creative Arts - Extension
<p><u>Throwing for Distance Family Challenge</u></p> <ul style="list-style-type: none"> Using an open space, practice throwing a ball as far as you can and mark the distance (using any object). Have 10 attempts and move the marker each time you throw past it. Once you've finished, measure the distance of your longest throw by counting the number of steps it takes and try to beat it next time. Your family members can also have a go! <p><u>Skipping Spelling</u></p> <ul style="list-style-type: none"> One person will call out a spelling word, while the other will begin jumping rope while spelling the word. When the person finishes spelling the word, their partner will check the word. If the word is spelt correctly, the partners earn a point! Switch over the roles after every word. 	<p><u>SQUIZ Kids Podcast - Episode</u></p> <p>With your parents' permission, listen to today's episode of The SQUIZ Kids Podcast. Here is the link:</p> <p>https://www.squizkids.com.au/</p> <p>In your 'My Book' write down interesting things you learnt from listening to the podcast.</p> <p>You may need to pause it so you have time to write. Try and write at least 1 page of notes. Don't forget to write a heading and a date in your book.</p> <p><u>Literacy Planet</u></p> <p>Complete one or more assigned grammar activities.</p>	<p>You might like to choose an activity from one of the</p> <p>"Break Ideas" sheets</p>	<p><u>Maths Mentals Book</u></p> <p>Complete one column. Time yourself and mark with a calculator.</p> <p>Year 4</p> <p>1) Complete "The Test of Time" worksheet (page 16 of your <i>Time Booklet</i>).</p> <p>2) Answer the following post-work questions:</p> <ol style="list-style-type: none"> Convert 180 seconds to minutes Convert 96 hours to days Is 8.30 at night written in am or pm notation? Twenty to six in the morning is the same as? If you catch a 1.15pm bus and arrive at your destination at 2.06pm, how long did the journey take? <p>3) Complete Pages 13 of your <i>Time Booklet</i>.</p> <p>4) Try and write the rhyme you copied yesterday about the days of the months without looking at it again. Check to see if you got it correct.</p>	<p><u>Catch up time</u></p> <p>Go over any of the previous maths work that you have missed.</p> <p><u>Daily Maths Problems Booklet</u></p> <p>Complete a page of your <i>Daily Maths Problems Booklet</i>, showing all working out. Get someone older than you to check your work.</p> <p><u>Mathletics</u></p> <p>Complete one or more assigned activities.</p>	<p>You might like to choose an activity from one of the</p> <p>"Break Ideas" sheets</p>	<p><u>Visual Arts</u></p> <p>Find household items and create a colour wheel. Take a photo.</p>  <p><u>Music</u></p> <p>Choose an object from around your house and experiment with how many different sounds you can make with it by playing it different ways</p> <p>Use an A4 piece of paper to see how many different sounds you can make with it (challenge: can you find over 25 ways?).</p>

